


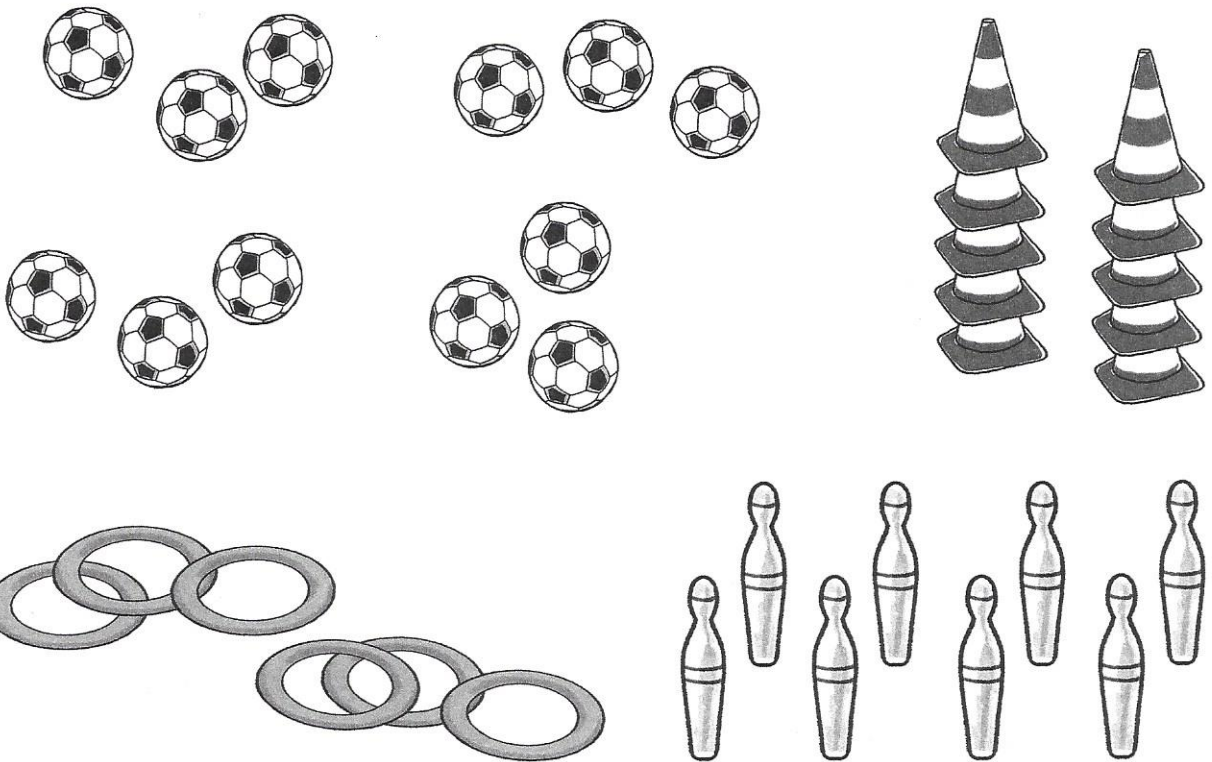
# Multiplizieren


Wie viele Bälle sind auf dem Bild?



$4 + 4 + 4 = 12$   
Schreibe dafür kürzer:  
 $3 \cdot 4 = 12$   
Lies:  
3 mal 4 ist gleich 12.


1 Finde zum Bild die Aufgaben.



a)   $3 + \blacksquare + \blacksquare + \blacksquare = \blacksquare \blacksquare$   
 $4 \cdot 3 = \blacksquare \blacksquare$

b)   $3 + \blacksquare = \blacksquare$   
 $\blacksquare \cdot 3 = \blacksquare$

c)   $\blacksquare + \blacksquare = \blacksquare \blacksquare$   
 $\blacksquare \cdot \blacksquare = \blacksquare \blacksquare$

d)   $\blacksquare + \blacksquare + \blacksquare + \blacksquare = \blacksquare$   
 $\blacksquare \cdot \blacksquare = \blacksquare$

2 a)  $5 + 5 + 5 = \blacksquare \cdot \blacksquare$   
 $9 + 9 = \blacksquare \cdot \blacksquare$   
 $7 + 7 + 7 + 7 = \blacksquare \cdot \blacksquare$

b)  $8 + 8 + 8 + 8 + 8 = \blacksquare \cdot \blacksquare$   
 $6 + 6 + 6 + 6 = \blacksquare \cdot \blacksquare$   
 $2 + 2 + 2 + 2 + 2 + 2 = \blacksquare \cdot \blacksquare$