


+
=

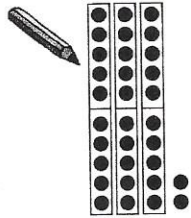
Streiche ab und rechne.

1 $46 - 17$



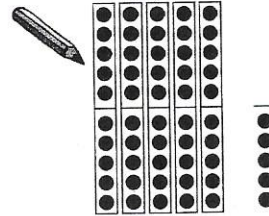
$$\begin{array}{r} 46 - 10 = \text{[] []} \\ \text{[] []} - 7 = \text{[] []} \\ \hline 46 - 17 = \text{[] []} \end{array}$$

$32 - 13$




$$\begin{array}{r} 32 - 10 = \text{[] []} \\ \text{[] []} - 3 = \text{[] []} \\ \hline 32 - 13 = \text{[] []} \end{array}$$

$55 - 28$




$$\begin{array}{r} \text{[] []} - \text{[] []} = \text{[] []} \\ \text{[] []} - \text{[]} = \text{[] []} \\ \hline 55 - 28 = \text{[] []} \end{array}$$

2 $74 - 46$




$$\begin{array}{r} \text{[] []} - \text{[] []} = \text{[] []} \\ \text{[] []} - \text{[]} = \text{[] []} \\ \hline 74 - 46 = \text{[] []} \end{array}$$

$43 - 25$



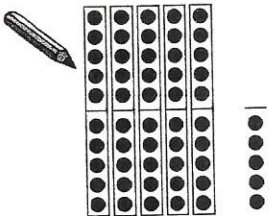
$$\begin{array}{r} \text{[] []} - \text{[] []} = \text{[] []} \\ \text{[] []} - \text{[]} = \text{[] []} \\ \hline 43 - 25 = \text{[] []} \end{array}$$

$61 - 35$




$$\begin{array}{r} \text{[] []} - \text{[] []} = \text{[] []} \\ \text{[] []} - \text{[]} = \text{[] []} \\ \hline 61 - 35 = \text{[] []} \end{array}$$

3 $55 - 38$




$$\begin{array}{r} \text{[] []} - \text{[] []} = \text{[] []} \\ \text{[] []} - \text{[]} = \text{[] []} \\ \hline 55 - 38 = \text{[] []} \end{array}$$

$53 - 28$



$$\begin{array}{r} \text{[] []} - \text{[] []} = \text{[] []} \\ \text{[] []} - \text{[]} = \text{[] []} \\ \hline 53 - 28 = \text{[] []} \end{array}$$

$62 - 24$



$$\begin{array}{r} \text{[] []} - \text{[] []} = \text{[] []} \\ \text{[] []} - \text{[]} = \text{[] []} \\ \hline 62 - 24 = \text{[] []} \end{array}$$

